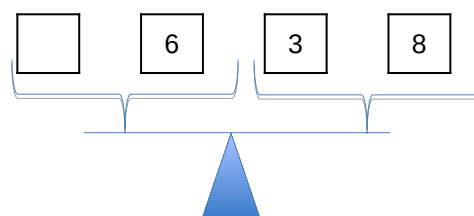
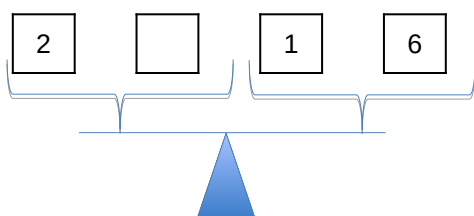
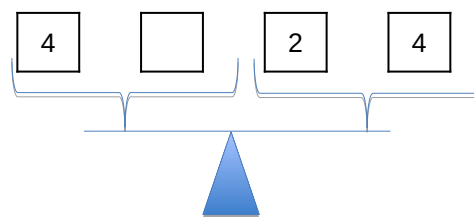
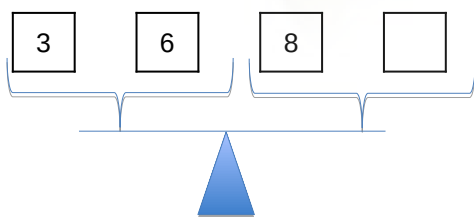
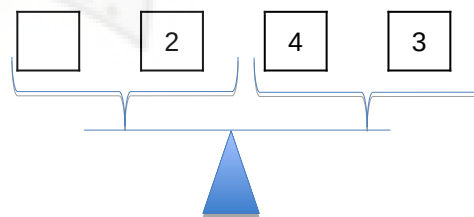
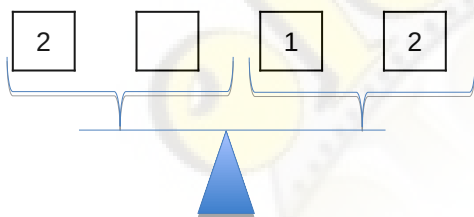
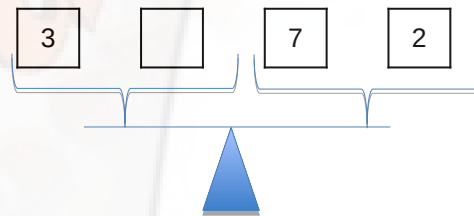
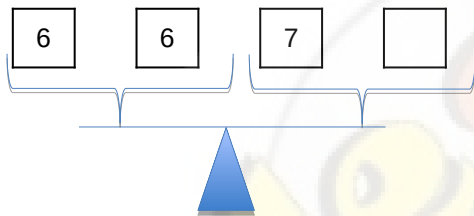
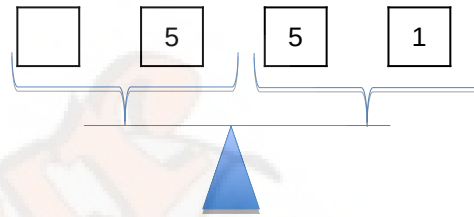
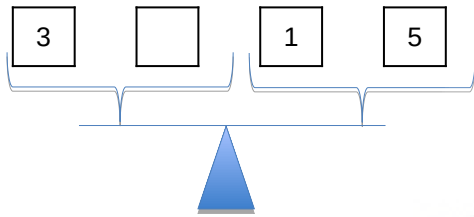
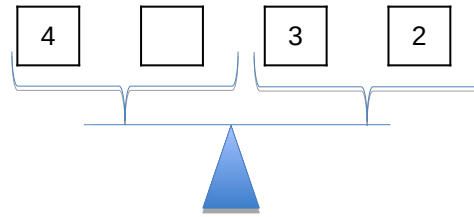
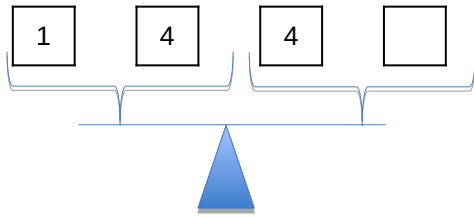


# Balanzas Matemáticas



# Balanzas Matemáticas

Coloca las balanzas en su lugar



□	□	□	□
}		}	
_____			
▲			
5			
2			
1			
6			

□	□	□	□
}		}	
_____			
▲			
7			
10			
7			
4			

□	□	□	□
}		}	
_____			
▲			
3			
9			
2			
8			

□	□	□	□
}		}	
_____			
▲			
5			
5			
1			
9			

□	□	□	□
}		}	
_____			
▲			
6			
1			
8			
3			

□	□	□	□
}		}	
_____			
▲			
8			
6			
4			
6			

□	□	□	□
}		}	
_____			
▲			
8			
8			
11			
5			

□	□	□	□
}		}	
_____			
▲			
7			
1			
7			
1			