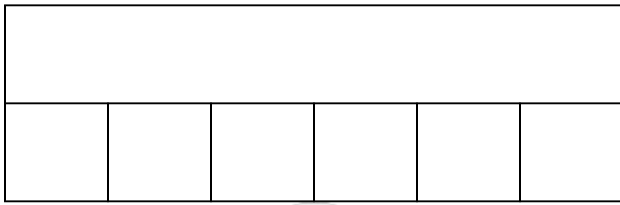


Nombre: Fecha:.....

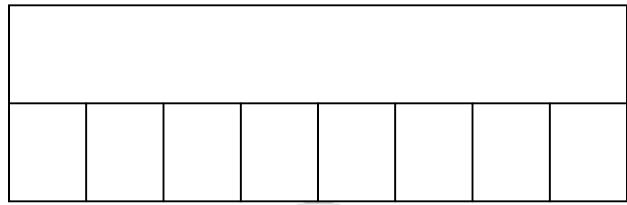


Completa divisiones con el modelo de barras.

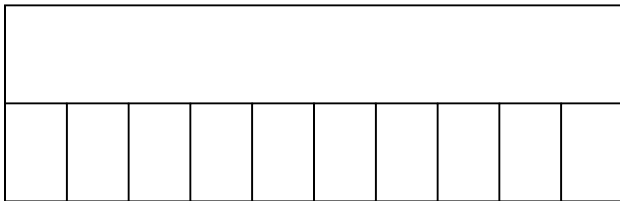
$$30 : 6 = \dots\dots$$



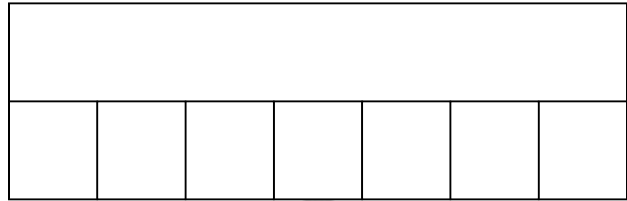
$$8 : 8 = \dots\dots$$



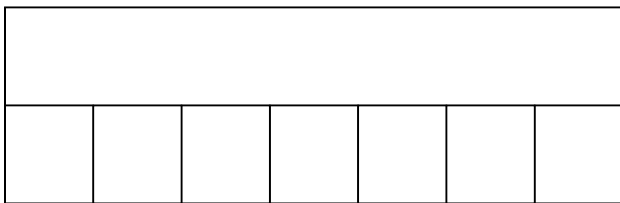
$$10 : 10 = \dots\dots$$



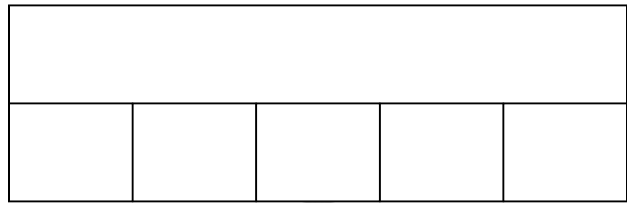
$$35 : 7 = \dots\dots$$




$$14 : 7 = \dots\dots$$



$$25 : 5 = \dots\dots$$



$$10 : 5 = \dots\dots$$



$$5 : 5 = \dots\dots$$

