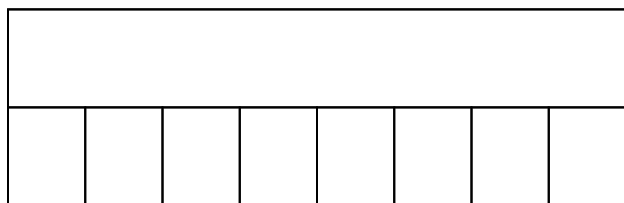


Nombre: ..... Fecha:.....




Completa multiplicaciones con el modelo de barras.

$8 \times 11 = \dots\dots\dots$




$1 \times 36 = \dots\dots\dots$



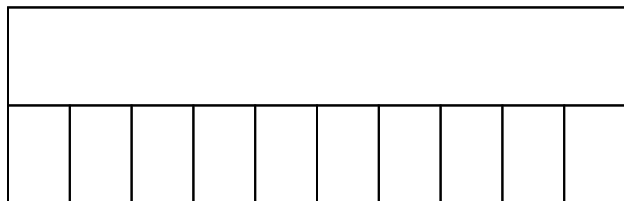
$2 \times 29 = \dots\dots\dots$



$3 \times 35 = \dots\dots\dots$




$10 \times 29 = \dots\dots\dots$



$2 \times 37 = \dots\dots\dots$



$7 \times 20 = \dots\dots\dots$



$8 \times 50 = \dots\dots\dots$

