

Nombre: Fecha:.....




Completa multiplicaciones con el modelo de barras.


$$3 \times 2 = \dots\dots$$




$$4 \times 4 = \dots\dots$$



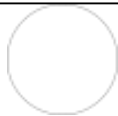

$$5 \times 3 = \dots\dots$$




$$4 \times 2 = \dots\dots$$



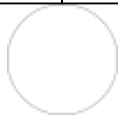

$$3 \times 4 = \dots\dots$$



$$3 \times 2 = \dots\dots$$



$$4 \times 6 = \dots\dots$$



$$5 \times 2 = \dots\dots$$

