


Nombre: ..... Fecha:.....



Completa multiplicaciones con el modelo de barras.


$4 \times 7 = \dots\dots$



$2 \times 9 = \dots\dots$



$3 \times 2 = \dots\dots$



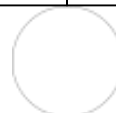
$4 \times 4 = \dots\dots$



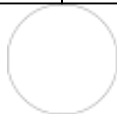
$3 \times 2 = \dots\dots$



$2 \times 4 = \dots\dots$



$2 \times 8 = \dots\dots$



$4 \times 9 = \dots\dots$

