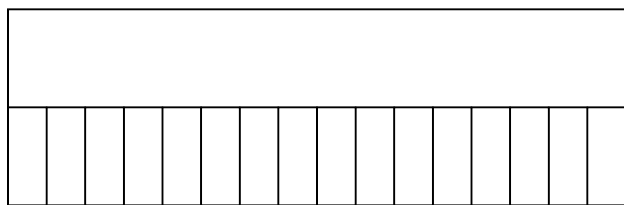


Nombre: Fecha:.....

Image: s-logc

Completa multiplicaciones con el modelo de barras.


$16 \times 2 = \dots\dots\dots$



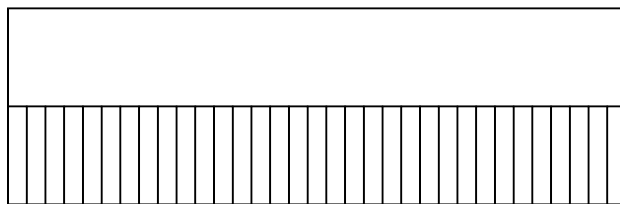
$1 \times 18 = \dots\dots\dots$



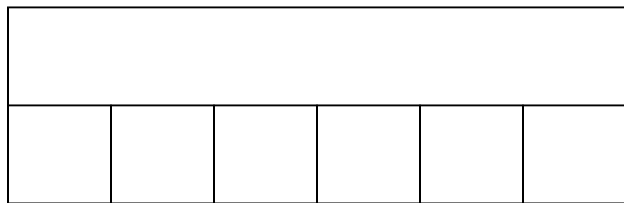
$43 \times 12 = \dots\dots\dots$




$33 \times 37 = \dots\dots\dots$



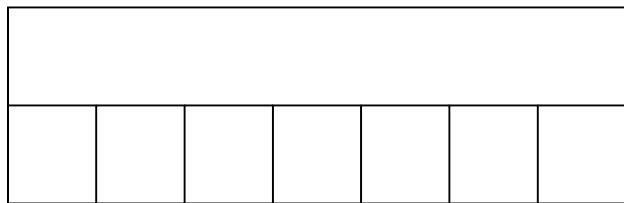
$6 \times 9 = \dots\dots\dots$



$47 \times 47 = \dots\dots\dots$



$7 \times 29 = \dots\dots\dots$



$10 \times 45 = \dots\dots\dots$

