

Nombre: ..... Fecha:.....

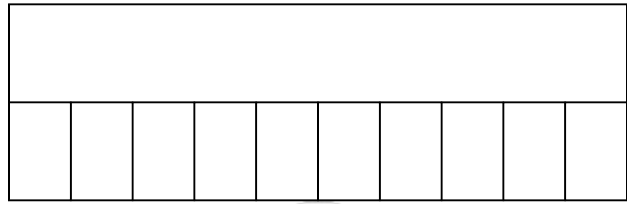


Completa multiplicaciones con el modelo de barras.

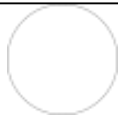

$1 \times 7 = \dots\dots$



$10 \times 3 = \dots\dots$



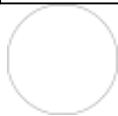
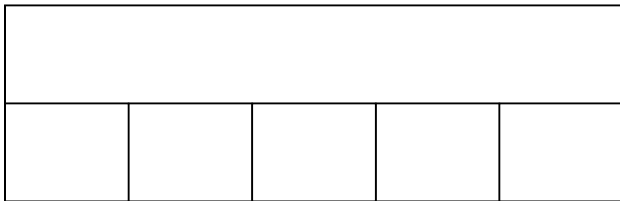
$3 \times 1 = \dots\dots$




$7 \times 8 = \dots\dots$




$5 \times 4 = \dots\dots$



$4 \times 4 = \dots\dots$



$5 \times 6 = \dots\dots$



$3 \times 6 = \dots\dots$

