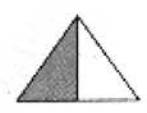

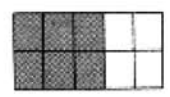


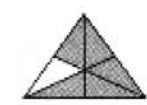

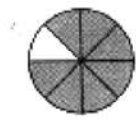


Nombre: _____

Fecha: _____

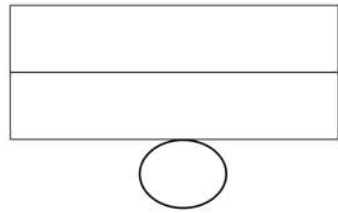
Representa Fracciones


$$\frac{\quad}{\quad}$$

$$\frac{\quad}{\quad}$$

$$\frac{\quad}{\quad}$$

$$\frac{\quad}{\quad}$$

$$\frac{\quad}{\quad}$$

$$\frac{\quad}{\quad}$$

$$\frac{\quad}{\quad}$$

$$\frac{\quad}{\quad}$$

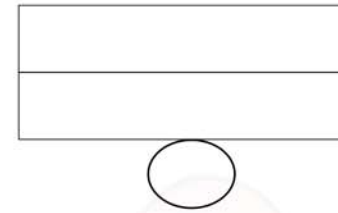
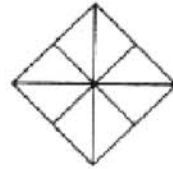
Nombre: _____

Fecha: _____

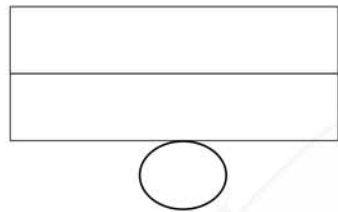
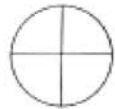
Representa Fracciones



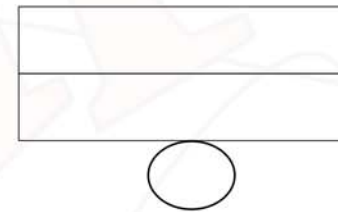
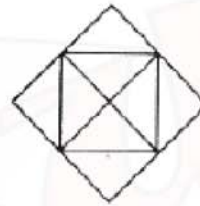
$$\frac{2}{6}$$



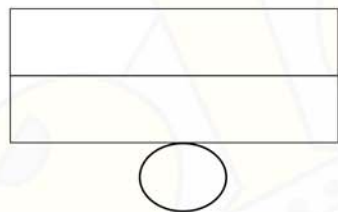
$$\frac{3}{8}$$



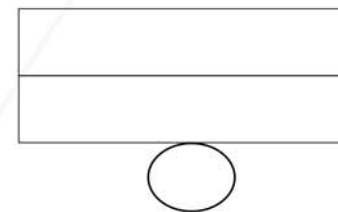
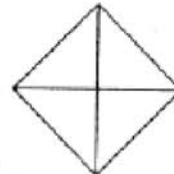
$$\frac{3}{4}$$



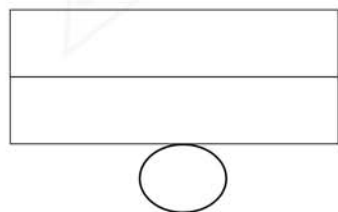

$$\frac{2}{8}$$



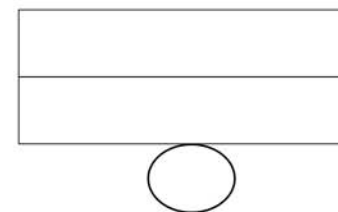
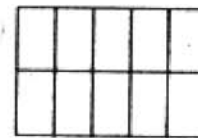
$$\frac{5}{8}$$



$$\frac{1}{4}$$



$$\frac{2}{7}$$



$$\frac{6}{10}$$

Nombre: _____

Fecha: _____

Representa Fracciones



		$\frac{\text{dotted circle}}{2}$			$\frac{\text{dotted circle}}{2}$
		$\frac{\text{dotted circle}}{2}$			$\frac{\text{dotted circle}}{2}$
		$\frac{\text{dotted circle}}{2}$			$\frac{\text{dotted circle}}{2}$
		$\frac{\text{dotted circle}}{2}$			$\frac{\text{dotted circle}}{2}$

Nombre: _____

Fecha: _____

Representa Fracciones

