






		
18	26	
  		
10	19	
  		
© 2017 olesur.com Dificultad (6)	Completa los números del 1 al 9.	

6

14





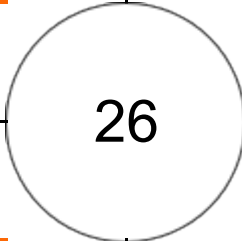




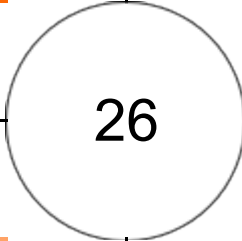


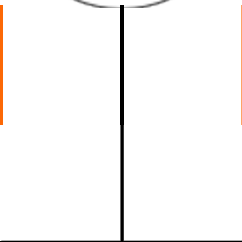

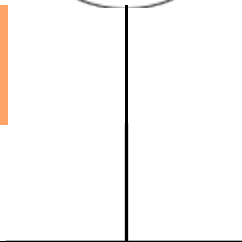

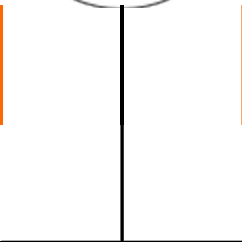

25

18

26

10

19

		
  17	  26	 6
  19	 8  26	 9
  17	 2  26	  19
© 2017 olesur.com Dificultad (5)		Completa los números del 1 al 9.
		

9		
<table border="1" style="width: 100%; border-collapse: collapse;"> <tr> <td style="width: 25px; height: 20px;"></td> <td style="width: 25px; height: 20px;"></td> </tr> </table>		

15			
<table border="1" style="width: 100%; border-collapse: collapse;"> <tr> <td style="width: 25px; height: 20px;"></td> <td style="width: 25px; height: 20px;"></td> <td style="width: 25px; height: 20px;"></td> </tr> </table>			






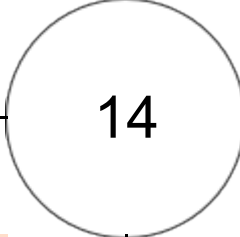



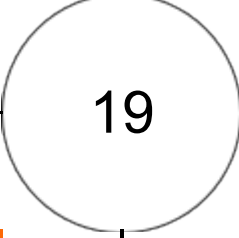
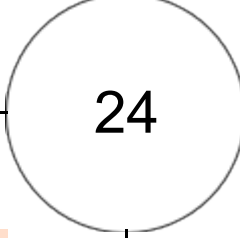




21			
<table border="1" style="width: 100%; border-collapse: collapse;"> <tr> <td style="width: 25px; height: 20px;"></td> <td style="width: 25px; height: 20px;"></td> <td style="width: 25px; height: 20px;"></td> </tr> </table>			

17			
<table border="1" style="width: 100%; border-collapse: collapse;"> <tr> <td style="width: 25px; height: 20px;"></td> <td style="width: 25px; height: 20px;"></td> <td style="width: 25px; height: 20px;"></td> </tr> </table>			

26			
<table border="1" style="width: 100%; border-collapse: collapse;"> <tr> <td style="width: 25px; height: 20px;"></td> <td style="width: 25px; height: 20px;"></td> <td style="width: 25px; height: 20px;"></td> </tr> </table>			

19			
<table border="1" style="width: 100%; border-collapse: collapse;"> <tr> <td style="width: 25px; height: 20px;"></td> <td style="width: 25px; height: 20px;"></td> <td style="width: 25px; height: 20px;"></td> </tr> </table>			

26			
<table border="1" style="width: 100%; border-collapse: collapse;"> <tr> <td style="width: 25px; height: 20px;"></td> <td style="width: 25px; height: 20px;"></td> <td style="width: 25px; height: 20px;"></td> </tr> </table>			

		
		
		
		
		
		
© 2017 olesur.com Dificultad (5)		Completa los números del 1 al 9.
		

9

14





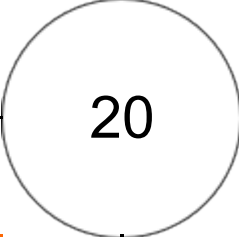
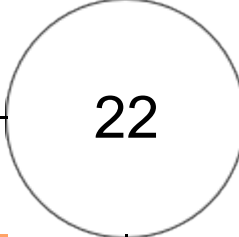



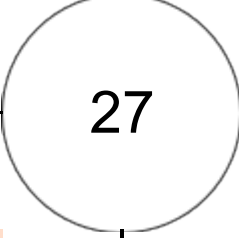
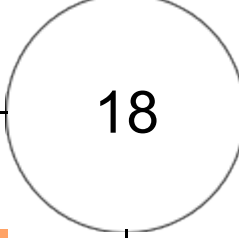




22

14

14

19

24

		
		
		
		
		
		
© 2017 olesur.com Dificultad (7)		Completa los números del 1 al 9.
		

12		
<table border="1" style="width: 100%; height: 20px;"> <tr> <td style="width: 25px;"> </td> <td style="width: 25px;"> </td> </tr> </table>		

14			
<table border="1" style="width: 100%; height: 20px;"> <tr> <td style="width: 25px;"> </td> <td style="width: 25px;"> </td> <td style="width: 25px;"> </td> </tr> </table>			





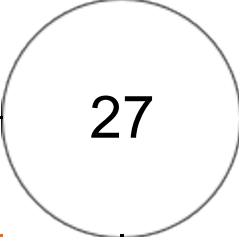
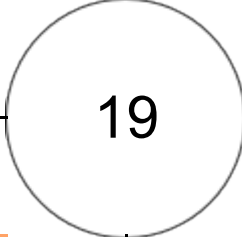



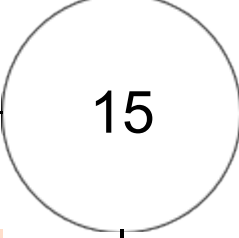
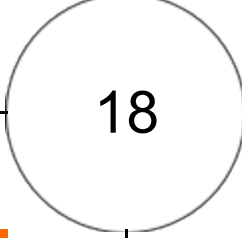




19			
<table border="1" style="width: 100%; height: 20px;"> <tr> <td style="width: 25px;"> </td> <td style="width: 25px;"> </td> <td style="width: 25px;"> </td> </tr> </table>			

20			
<table border="1" style="width: 100%; height: 20px;"> <tr> <td style="width: 25px;"> </td> <td style="width: 25px;"> </td> <td style="width: 25px;"> </td> </tr> </table>			

22			
<table border="1" style="width: 100%; height: 20px;"> <tr> <td style="width: 25px;"> </td> <td style="width: 25px;"> </td> <td style="width: 25px;"> </td> </tr> </table>			

27			
<table border="1" style="width: 100%; height: 20px;"> <tr> <td style="width: 25px;"> </td> <td style="width: 25px;"> </td> <td style="width: 25px;"> </td> </tr> </table>			

18			
<table border="1" style="width: 100%; height: 20px;"> <tr> <td style="width: 25px;"> </td> <td style="width: 25px;"> </td> <td style="width: 25px;"> </td> </tr> </table>			

		
		
		
		
		
		
© 2017 olesur.com Dificultad (7)		Completa los números del 1 al 9.
		

11				
<table border="1" style="width: 100%; height: 15px;"> <tr> <td style="width: 25%;"></td> <td style="width: 25%;"></td> <td style="width: 25%;"></td> <td style="width: 25%;"></td> </tr> </table>				

13				
<table border="1" style="width: 100%; height: 15px;"> <tr> <td style="width: 25%;"></td> <td style="width: 25%;"></td> <td style="width: 25%;"></td> <td style="width: 25%;"></td> </tr> </table>				





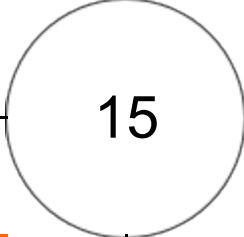



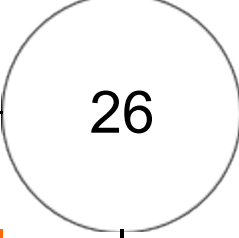
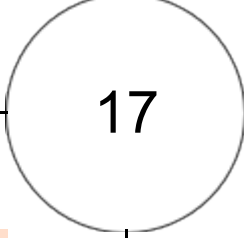




21				
<table border="1" style="width: 100%; height: 15px;"> <tr> <td style="width: 25%;"></td> <td style="width: 25%;"></td> <td style="width: 25%;"></td> <td style="width: 25%;"></td> </tr> </table>				

27				
<table border="1" style="width: 100%; height: 15px;"> <tr> <td style="width: 25%;"></td> <td style="width: 25%;"></td> <td style="width: 25%;"></td> <td style="width: 25%;"></td> </tr> </table>				

19				
<table border="1" style="width: 100%; height: 15px;"> <tr> <td style="width: 25%;"></td> <td style="width: 25%;"></td> <td style="width: 25%;"></td> <td style="width: 25%;"></td> </tr> </table>				

15				
<table border="1" style="width: 100%; height: 15px;"> <tr> <td style="width: 25%;"></td> <td style="width: 25%;"></td> <td style="width: 25%;"></td> <td style="width: 25%;"></td> </tr> </table>				

18				
<table border="1" style="width: 100%; height: 15px;"> <tr> <td style="width: 25%;"></td> <td style="width: 25%;"></td> <td style="width: 25%;"></td> <td style="width: 25%;"></td> </tr> </table>				

			
			
			
			
			
© 2017 olesur.com Dificultad (9)		Completa los números del 1 al 9.	

5				
<table border="1" style="width: 100%; height: 15px;"> <tr> <td style="width: 25%;"></td> <td style="width: 25%;"></td> <td style="width: 25%;"></td> <td style="width: 25%;"></td> </tr> </table>				

15				
<table border="1" style="width: 100%; height: 15px;"> <tr> <td style="width: 25%;"></td> <td style="width: 25%;"></td> <td style="width: 25%;"></td> <td style="width: 25%;"></td> </tr> </table>				


25				
<table border="1" style="width: 100%; height: 15px;"> <tr> <td style="width: 25%;"></td> <td style="width: 25%;"></td> <td style="width: 25%;"></td> <td style="width: 25%;"></td> </tr> </table>				

18				
<table border="1" style="width: 100%; height: 15px;"> <tr> <td style="width: 25%;"></td> <td style="width: 25%;"></td> <td style="width: 25%;"></td> <td style="width: 25%;"></td> </tr> </table>				

15				
<table border="1" style="width: 100%; height: 15px;"> <tr> <td style="width: 25%;"></td> <td style="width: 25%;"></td> <td style="width: 25%;"></td> <td style="width: 25%;"></td> </tr> </table>				

26				
<table border="1" style="width: 100%; height: 15px;"> <tr> <td style="width: 25%;"></td> <td style="width: 25%;"></td> <td style="width: 25%;"></td> <td style="width: 25%;"></td> </tr> </table>				

17				
<table border="1" style="width: 100%; height: 15px;"> <tr> <td style="width: 25%;"></td> <td style="width: 25%;"></td> <td style="width: 25%;"></td> <td style="width: 25%;"></td> </tr> </table>				

7		
28	18	
	24	18
	1	
© 2017 olesur.com Dificultad (9)		Completa los números del 1 al 9. 

10				
<table border="1" style="width: 100%; height: 20px;"> <tr> <td style="width: 25%;"></td> <td style="width: 25%;"></td> <td style="width: 25%;"></td> <td style="width: 25%;"></td> </tr> </table>				

12				
<table border="1" style="width: 100%; height: 20px;"> <tr> <td style="width: 25%;"></td> <td style="width: 25%;"></td> <td style="width: 25%;"></td> <td style="width: 25%;"></td> </tr> </table>				



23				
<table border="1" style="width: 100%; height: 20px;"> <tr> <td style="width: 25%;"></td> <td style="width: 25%;"></td> <td style="width: 25%;"></td> <td style="width: 25%;"></td> </tr> </table>				

28				
<table border="1" style="width: 100%; height: 20px;"> <tr> <td style="width: 25%;"></td> <td style="width: 25%;"></td> <td style="width: 25%;"></td> <td style="width: 25%;"></td> </tr> </table>				

18				
<table border="1" style="width: 100%; height: 20px;"> <tr> <td style="width: 25%;"></td> <td style="width: 25%;"></td> <td style="width: 25%;"></td> <td style="width: 25%;"></td> </tr> </table>				

24				
<table border="1" style="width: 100%; height: 20px;"> <tr> <td style="width: 25%;"></td> <td style="width: 25%;"></td> <td style="width: 25%;"></td> <td style="width: 25%;"></td> </tr> </table>				

18				
<table border="1" style="width: 100%; height: 20px;"> <tr> <td style="width: 25%;"></td> <td style="width: 25%;"></td> <td style="width: 25%;"></td> <td style="width: 25%;"></td> </tr> </table>				

		
<div style="border: 1px solid black; width: 40px; height: 40px; margin: 0 auto; background-color: #f9cb9c; display: flex; align-items: center; justify-content: center;">1</div>	<div style="border: 1px solid black; width: 40px; height: 40px; margin: 0 auto; background-color: #f4a460;"></div>	<div style="border: 1px solid black; width: 40px; height: 40px; margin: 0 auto; background-color: #f9cb9c;"></div>
<div style="display: flex; justify-content: space-around; align-items: center;"> <div style="border: 1px solid black; border-radius: 50%; width: 60px; height: 60px; display: flex; align-items: center; justify-content: center;">12</div> <div style="border: 1px solid black; border-radius: 50%; width: 60px; height: 60px; display: flex; align-items: center; justify-content: center;">18</div> </div>		
<div style="border: 1px solid black; width: 40px; height: 40px; margin: 0 auto; background-color: #f4a460;"></div>	<div style="border: 1px solid black; width: 40px; height: 40px; margin: 0 auto; background-color: #f9cb9c;"></div>	<div style="border: 1px solid black; width: 40px; height: 40px; margin: 0 auto; background-color: #f4a460;"></div>
<div style="display: flex; justify-content: space-around; align-items: center;"> <div style="border: 1px solid black; border-radius: 50%; width: 60px; height: 60px; display: flex; align-items: center; justify-content: center;">21</div> <div style="border: 1px solid black; border-radius: 50%; width: 60px; height: 60px; display: flex; align-items: center; justify-content: center;">25</div> </div>		
<div style="border: 1px solid black; width: 40px; height: 40px; margin: 0 auto; background-color: #f9cb9c; display: flex; align-items: center; justify-content: center;">7</div>	<div style="border: 1px solid black; width: 40px; height: 40px; margin: 0 auto; background-color: #f4a460;"></div>	<div style="border: 1px solid black; width: 40px; height: 40px; margin: 0 auto; background-color: #f4a460;"></div>
<p>© 2017 olesur.com Dificultad (10)</p>		<p>Completa los números del 1 al 9.</p>
		

7

23

15

12

18

21

25