


Nombre: Fecha:.....




Completa divisiones con el modelo de barras.

$4 : 1 = \dots\dots$




$8 : 1 = \dots\dots$



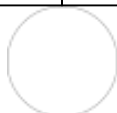

$6 : 3 = \dots\dots$




$12 : 3 = \dots\dots$




$16 : 4 = \dots\dots$



$7 : 1 = \dots\dots$



$2 : 1 = \dots\dots$



$12 : 3 = \dots\dots$

